

Name: _____

1, 100 PATTERNS

I can create

Circle de Mayo **SEQUENCING**

I can SEQUENCE a set of ODD numbers from least to greatest.

--	--	--	--	--	--	--	--

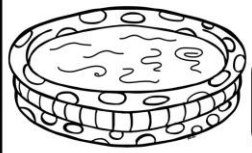
LEAST GREATEST

Name: _____

HOW MANY

Sandcastle *Sums*

The kids built 4 sandcastles on Saturday. They built 3 sandcastles on Sunday than they did on Saturday.



There were _____ pool. 4 How many more sandcastles did the kids build on Sunday?

$\square + \square = \square$


I can write and show my thinking.

Name: _____

MORE Jellyfish

There are 4 squid in the sea. There are 5 more jellyfish in the sea than there are squid. How many jellyfish are in the sea?

DRAW AND SOLVE



Write a number sentence.

10	13
15	11
12	14

A BUCKET FULL OF Tallies

Write a number sentence.


Name: _____

ICE CREAM Dream

There are 7 ice cream cones. 3 are vanilla and the rest are chocolate. How many ice cream cones are chocolate?

DRAW AND SOLVE


Cut and glue on top of the matching amount.



ANSWER

Name: _____

DELICIOUS Difference



5-2 4-2 6-5 8-4

7-2 9-2

Counting PETALS

The little girl picked 7 flowers for her mom on Monday. She picked 5 FEWER flowers for her mom on Tuesday.


How many flowers did she pick for her mom on Tuesday?

$\square - \square = \square$

Name: _____

MORE Maracas

The little boy had 4 maracas. His friend gave him 3 more. How many maracas does the little boy have in all?



7 9
10 5
0 6
3 3


I can write a number sentence to show my thinking.

$\square + \square = \square$

Name: _____

MANY Maracas

The kids have an EVEN number of maracas.



How many shells are there in all?

$\square + \square + \square + \square = \square$


I can write a number sentence to show my thinking.

$\square + \square = \square$

Name: _____

Swimming SUMS

3+5 2+2 4+3



How many kids are swimming in all?


$\square + \square = \square$

Name: _____

PLENTY of Popsicles

There are 2 red popsicles and 7 orange popsicles. How many popsicles are there altogether?

DRAW AND SOLVE



How many flowers did she pick for her mom on Tuesday?

$\square - \square = \square$

Name: _____

Base Ten Balance

9 18




How many flowers did she pick for her mom on Tuesday?

$\square - \square = \square$

Name: _____

POOR, POOR POPSICLES

The little boy ate 2 more than the girl.



How many more did the boy eat?

$\square - \square = \square$

Name: _____

Swimming SUMS

3+5 2+2 4+3



How many kids are swimming in all?


$\square + \square = \square$

Name: _____

BOUNCING References

The little boy had 5 beach balls. He had 3 more than the little girl. How many beach balls does the little girl have?

DRAW AND SOLVE

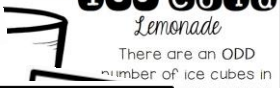


ANSWER

Name: _____

Ice Cold Lemonade

There are an ODD number of ice cubes in the pitcher.



How many ice cubes are there in all?

$\square + \square = \square$

Name: _____

Let's Make Ten

I can add more to the ten frame to make 10 altogether and write a number sentence to show my thinking.



How many roses does mom have altogether?

$\square + \square = \square$

Name: _____

ORDER the Ordinals

The umbrellas in the second box. Glue the sandbox in the third fourth box. Glue the beach ball in the last box.



ANSWER

Name: _____

Let's Make Ten

I can add more to the ten frame to make 10 altogether and write a number sentence to show my thinking.



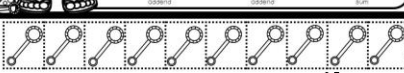
How many roses does mom have altogether?

$\square + \square = \square$

Name: _____

ORDER the Ordinals

The umbrellas in the second box. Glue the sandbox in the third fourth box. Glue the beach ball in the last box.



ANSWER

Name: _____

Let's Make Ten

I can add more to the ten frame to make 10 altogether and write a number sentence to show my thinking.



How many roses does mom have altogether?

$\square + \square = \square$

Name: _____

ORDER the Ordinals

The umbrellas in the second box. Glue the sandbox in the third fourth box. Glue the beach ball in the last box.



ANSWER

Name: _____

Let's Make Ten

I can add more to the ten frame to make 10 altogether and write a number sentence to show my thinking.



How many roses does mom have altogether?

$\square + \square = \square$

Name: _____

ORDER the Ordinals

The umbrellas in the second box. Glue the sandbox in the third fourth box. Glue the beach ball in the last box.



ANSWER

Name: _____

Let's Make Ten

I can add more to the ten frame to make 10 altogether and write a number sentence to show my thinking.



How many roses does mom have altogether?

$\square + \square = \square$

Name: _____

ORDER the Ordinals

The umbrellas in the second box. Glue the sandbox in the third fourth box. Glue the beach ball in the last box.



ANSWER

Name: _____

Let's Make Ten

I can add more to the ten frame to make 10 altogether and write a number sentence to show my thinking.



How many roses does mom have altogether?

$\square + \square = \square$

Name: _____

ORDER the Ordinals

The umbrellas in the second box. Glue the sandbox in the third fourth box. Glue the beach ball in the last box.



ANSWER

Name: _____

Let's Make Ten

I can add more to the ten frame to make 10 altogether and write a number sentence to show my thinking.



How many roses does mom have altogether?

$\square + \square = \square$

Name: _____

ORDER the Ordinals

The umbrellas in the second box. Glue the sandbox in the third fourth box. Glue the beach ball in the last box.




ANSWER

Name: _____

Let's Make Ten

I can add more to the ten frame to make 10 altogether and write a number sentence to show my thinking.



How many roses does mom have altogether?

$\square + \square = \square$

Name: _____

ORDER the Ordinals

The umbrellas in the second box. Glue the sandbox in the third fourth box. Glue the beach ball in the last box.




ANSWER

Name: _____

Let's Make Ten

I can add more to the ten frame to make 10 altogether and write a number sentence to show my thinking.



How many roses does mom have altogether?

$\square + \square = \square$

Name: _____

ORDER the Ordinals

The umbrellas in the second box. Glue the sandbox in the third fourth box. Glue the beach ball in the last box.



ANSWER

Name: _____

Let's Make Ten

I can add more to the ten frame to make 10 altogether and write a number sentence to show my thinking.



How many roses does mom have altogether?

$\square + \square = \square$

Name: _____

ORDER the Ordinals

The umbrellas in the second box. Glue the sandbox in the third fourth box. Glue the beach ball in the last box.



ANSWER

Name: _____

Let's Make Ten

I can add more to the ten frame to make 10 altogether and write a number sentence to show my thinking.



How many roses does mom have altogether?

$\square + \square = \square$

Name: _____

ORDER the Ordinals

The umbrellas in the second box. Glue the sandbox in the third fourth box. Glue the beach ball in the last box.



ANSWER

SPLASH

into Summer

We're movin' on up, but first let's review!

The Math Edition

By: Cara Carroll
The First Grade Parade



90 Printable Pages

Addition & Subtraction

Patterns, Ordinals, Even & Odd

Base Ten, Sequencing, & Tallies

Interactive Skill Review & Problem Solving